



Find the **AREA** for these Lesson 3 focus facts! The first one has been done for you.



**L x W = AREA**  
**5 x 4 = 20,**

so the AREA  
of the figure is  
20  
square units.


**5** x **4**  
Groups of "Things"  
Rows of Tiles



**L x W = AREA**  
**4 x 5 = \_\_\_\_\_,**

so the AREA  
of the figure is  
\_\_\_\_\_  
square units.


**4** x **5**  
Groups of "Things"  
Rows of Tiles



**L x W = AREA**  
**5 x 6 = \_\_\_\_\_,**

so the AREA  
of the figure is  
\_\_\_\_\_  
square units.


**5** x **6**  
Groups of "Things"  
Rows of Tiles



**L x W = AREA**  
**6 x 5 = \_\_\_\_\_,**

so the AREA  
of the figure is  
\_\_\_\_\_  
square units.


**6** x **5**  
Groups of "Things"  
Rows of Tiles



**L x W = AREA**  
**5 x 8 = \_\_\_\_\_,**

so the AREA  
of the figure is  
\_\_\_\_\_  
square units.

**5** x **8**  
Groups of "Things"  
Rows of Tiles



**L x W = AREA**  
**8 x 5 = \_\_\_\_\_,**

so the AREA  
of the figure is  
\_\_\_\_\_  
square units.

**8** x **5**  
Groups of "Things"  
Rows of Tiles