



Find the **AREA** for these Lesson 4 focus facts! The first one has been done for you.



L x W = AREA
9 x 4 = 36,

so the AREA
of the figure is
36
square units.

9 x **4**
Groups of "Things"
Rows of Tiles




L x W = AREA
4 x 9 = _____,

so the AREA
of the figure is

square units.

4 x **9**
Groups of "Things"
Rows of Tiles




L x W = AREA
9 x 3 = _____,

so the AREA
of the figure is

square units.

9 x **3**
Groups of "Things"
Rows of Tiles




L x W = AREA
3 x 9 = _____,

so the AREA
of the figure is

square units.

3 x **9**
Groups of "Things"
Rows of Tiles




L x W = AREA
9 x 7 = _____,

so the AREA
of the figure is

square units.

9 x **7**
Groups of "Things"
Rows of Tiles



L x W = AREA
7 x 9 = _____,

so the AREA
of the figure is

square units.

7 x **9**
Groups of "Things"
Rows of Tiles