



Find the **AREA** for these Lesson 8 focus facts! The first one has been done for you.



L X W = AREA
3 X 3 = 9,

so the AREA
of the figure is
9
square units.

3 X **3**
Groups of "Things"
Rows of Tiles




L X W = AREA
3 X 3 = _____,

so the AREA
of the figure is

square units.

3 X **3**
Groups of "Things"
Rows of Tiles




L X W = AREA
7 X 7 = _____,

so the AREA
of the figure is

square units.

7 X **7**
Groups of "Things"
Rows of Tiles




L X W = AREA
7 X 7 = _____,

so the AREA
of the figure is

square units.

7 X **7**
Groups of "Things"
Rows of Tiles




L X W = AREA
8 X 8 = _____,

so the AREA
of the figure is

square units.

8 X **8**
Groups of "Things"
Rows of Tiles



L X W = AREA
8 X 8 = _____,

so the AREA
of the figure is

square units.

8 X **8**
Groups of "Things"
Rows of Tiles