


Find the **AREA** for these Lesson 6 focus facts! The first one has been done for you.




L X W = AREA
7 X 6 = 42,

so the AREA
of the figure is
42
square units.

7 X **6**

Groups of "Things"
Rows of Tiles




L X W = AREA
6 X 7 = _____,

so the AREA
of the figure is

square units.

6 X **7**

Groups of "Things"
Rows of Tiles




L X W = AREA
3 X 4 = _____,

so the AREA
of the figure is

square units.

3 X **4**

Groups of "Things"
Rows of Tiles




L X W = AREA
4 X 3 = _____,

so the AREA
of the figure is

square units.

4 X **3**

Groups of "Things"
Rows of Tiles




L X W = AREA
7 X 8 = _____,

so the AREA
of the figure is

square units.

7 X **8**

Groups of "Things"
Rows of Tiles



L X W = AREA
8 X 7 = _____,

so the AREA
of the figure is

square units.

8 X **7**

Groups of "Things"
Rows of Tiles